

## Multi Tasking Non Technical Staff and Havaladar CBIC and CBN Examination 2024

Exam Date	07/10/2024
Exam Time	12:30 PM - 2:30 PM
Subject	MTS Non Tech Havaladar CBIC and CBN Examination 2024

### Section : Numerical and Mathematical Ability

**Q.1** The average of seven consecutive numbers is 95. Find the middle number in the series of seven consecutive numbers.

- Ans**
- 1. 96
  - 2. 98
  - 3. 92
  - 4. 95

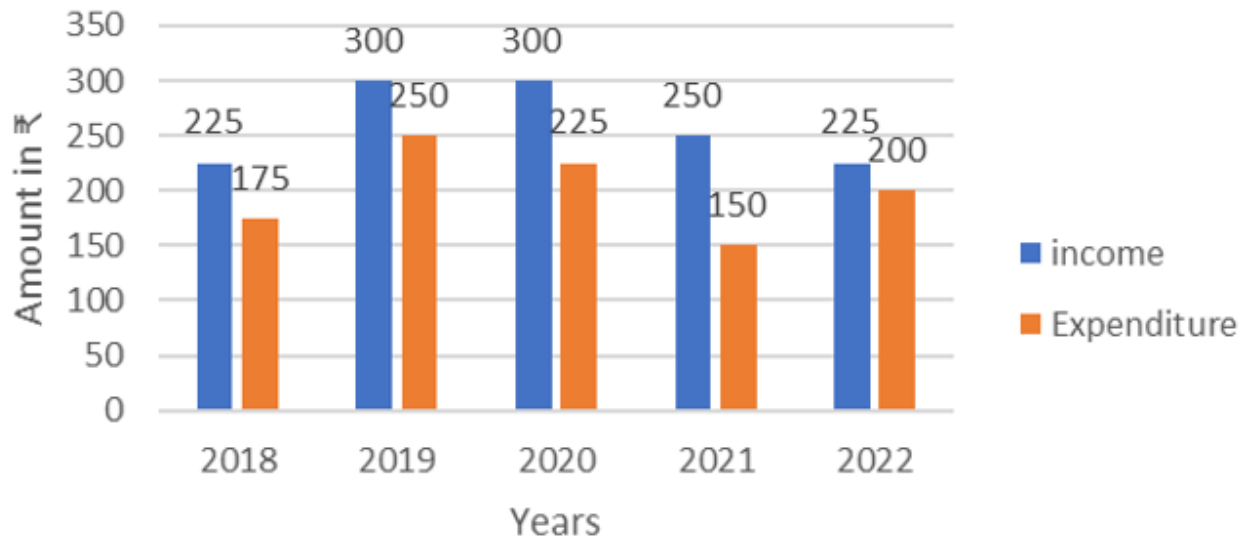
**Q.2** ₹20 में एक वस्तु को बेचकर, एक विक्रेता 10% का लाभ अर्जित करता है। उसे अपना विक्रय मूल्य (₹ में, दो दशमलव स्थान तक सन्निकटित) कितना बढ़ाना चाहिए, ताकि 50% का लाभ अर्जित कर सके?

- Ans**
- 1. 9.27
  - 2. 8.27
  - 3. 10.27
  - 4. 7.27

**Q.3** The number of heads on the farm, as determined by the farmer, was 60. When he counted, he discovered there were 150 legs. If all that was present were pigeons or horses, and every horse on the property had four legs while every pigeon had two, how many horses were there on the property?

- Ans**
- 1. 10
  - 2. 14
  - 3. 12
  - 4. 15

- Q.4 Study the bar graph and answer the question that follows.  
The bar graph shows the income and expenditure (in ₹ crores) of a company in 5 years during 2018 to 2022.



In which year is the ratio of income to expenditure 2<sup>nd</sup> highest?

- Ans
- 1. 2019
  - 2. 2020
  - 3. 2018
  - 4. 2022

- Q.5 Trader A gives a single discount of 45% and Trader B gives two successive discounts of 35% and 10% on an identical item of the same marked price. If the discount given by A is ₹539 more than the discount given by Trader B, then what is the marked price (in ₹) of the item?

- Ans
- 1. 15,400
  - 2. 14,500
  - 3. 15,600
  - 4. 16,500

- Q.6 A 240 m long train crosses a man walking at a speed of 4.5 km/h in the opposite direction in 12 seconds. What is the speed (in km/h) of the train?

- Ans
- 1. 61.5
  - 2. 58.5
  - 3. 67.5
  - 4. 60.5

- Q.7 The volume of the hemisphere is  $486\pi$  cm<sup>3</sup>. If the radius is tripled, then what will be its curved surface area (in cm<sup>2</sup>)?

- Ans
- 1.  $1025\pi$
  - 2.  $1458\pi$
  - 3. 1458
  - 4. 1546

- Q.8 Find the simple interest (in ₹) on ₹3000 as a sum borrowed at 6% per year rate of interest for 5 years.

- Ans
- 1. 860
  - 2. 900
  - 3. 840
  - 4. 940

Q.9 141 is divided into two parts in such a way that the one-eighth part of the first and one-ninth part of the second are in the ratio 5 : 6. Find the first part.

- Ans
- 1. 48
  - 2. 60
  - 3. 72
  - 4. 36

Q.10 A car can cover 275 km in 5 hours. If its speed is reduced by 5 km/h, then how much time will the car take to cover a distance of 250 km?

- Ans
- 1. 5 hr
  - 2. 4 hr 30 min
  - 3. 6 hr
  - 4. 5 hr 30 min

Q.11 The radius of a cylinder is doubled due to which the volume of the new cylinder also gets doubled. The height of the new cylinder is what percentage of the old cylinder?

- Ans
- 1. 50%
  - 2. 100%
  - 3. 200%
  - 4. 25%

Q.12 The average weight of a family of five members (in kg) whose weights are 40 kg, 49 kg, 56 kg, 67 kg and 36 kg is:

- Ans
- 1. 48.6
  - 2. 51.6
  - 3. 49.6
  - 4. 50.6

Q.13 Find the simple interest (in ₹) on ₹4000 as a sum borrowed at 4% per year rate of interest for 3 years.

- Ans
- 1. 420
  - 2. 480
  - 3. 440
  - 4. 520

Q.14 The given table represents the number of tablets sold by five dealers in the year 2022.

Dealers	Number of Tablets sold (in lakhs)
A	12
B	15
C	10
D	25
E	22

What is the difference of total number of tablets (in lakhs) sold by A, B and D, E?

- Ans
- 1. 20
  - 2. 25
  - 3. 22
  - 4. 18

Q.15 The largest number that can divide 147,183 and 271 leaving remainders 11,13 and 16, respectively, is:

- Ans
- 1. 16
  - 2. 17
  - 3. 15
  - 4. 14

Q.16 Anil sells sugar at cost price but uses false weights and thus makes 20% profit. How many grams of sugar does he give in 1 kilogram?

- Ans
- 1. 833.13
  - 2. 833.33
  - 3. 823.33
  - 4. 833.23

Q.17 The average weight of a family of five members (in kg) whose weights are 40 kg, 49 kg, 56 kg, 66 kg and 35 kg is:

- Ans
- 1. 51.2
  - 2. 49.2
  - 3. 50.2
  - 4. 48.2

Q.18 The salaries of A and B are in a ratio of 2 : 3. Their savings are equal. If A's expenditure is  $\frac{1}{2}$  of the salary, then what per cent of income does B spend?

- Ans
- 1. 66.67%
  - 2. 50%
  - 3. 75%
  - 4. 78.5%

Q.19 A hemispherical bowl with diameter 14 cm has to be painted inside and outside. How much it will be charged at the rate of ₹20 per 40 cm<sup>2</sup>?

- Ans
- 1. ₹308
  - 2. ₹154
  - 3. ₹224
  - 4. ₹616

Q.20 At what rate percent per annum on simple interest will ₹760 amount to ₹912 in 5 years?

- Ans
- 1. 5%
  - 2. 4%
  - 3. 3%
  - 4. 6%

#### Section : Reasoning Ability and Problem Solving

Q.1 Read the given statements and conclusions carefully. Assuming that the information given in the statements is true, even if it appears to be at variance with commonly known facts, decide which of the given conclusions logically follow(s) from the statements.

Statements:

All roses are lilies.

Some lilies are sunflowers.

Conclusions:

(I): Some roses are sunflowers.

(II): All lilies are roses.

- Ans
- 1. Both conclusions I and II follow.
  - 2. Only conclusion I follows.
  - 3. Neither conclusion I nor II follows.
  - 4. Only conclusion II follows.

Q.2 What will come in the place of the question mark (?) in the following equation, if '+' and '-' are interchanged and 'x' and '÷' are interchanged?  
 $5 \div 4 - 3 \times 1 + 2 = ?$

- Ans
- 1. 21
  - 2. 16
  - 3. 20
  - 4. 19

Q.3 In a certain code language, 'BUY' is written as 'ACTVXZ' and 'CAP' is written as 'BDZBOQ'. How will 'BOX' be written in that language?

- Ans
- 1. ACMPUY
  - 2. CDPQYZ
  - 3. ACMPWY
  - 4. ACNPWY

Q.4 In a certain code language, 'bring hot food' is coded as 'ud lp sj' and 'food is tasty' is coded as 'sj xk jt'. How is 'food' coded in the given language?

- Ans
- 1. xk
  - 2. lp
  - 3. sj
  - 4. ud

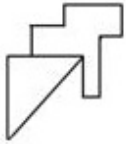
Q.5 What should come in place of '?' in the given series?

16, 8.5, 9.5, 15.75, 33.5, ?

- Ans
- 1. 83.75
  - 2. 67
  - 3. 86.25
  - 4. 69

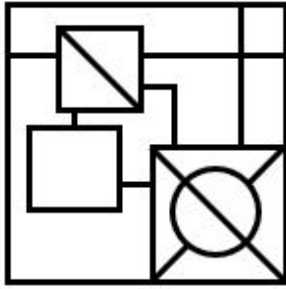
Adda247

Q.6 Select the option in which the given figure is embedded (rotation is NOT allowed).

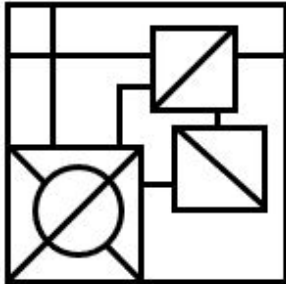


Ans

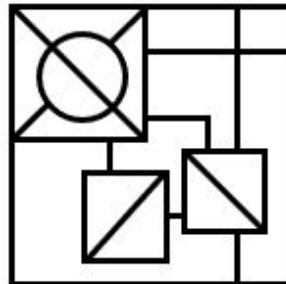
✗ 1.



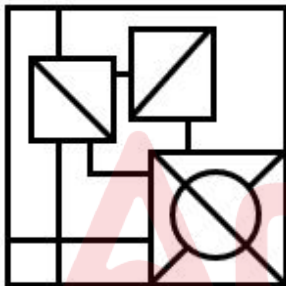
✗ 2.



✓ 3.



✗ 4.



Q.7 In the following number-pairs, the second number is obtained by applying certain mathematical operations to the first number. Select the set in which the numbers are related in the same way as are the numbers of the following sets.

(NOTE: Operations should be performed on the whole numbers, without breaking down the numbers into its constituent digits. E.g. 13 – Operations on 13 such as adding/subtracting/multiplying etc. to 13 can be performed. Breaking down 13 into 1 and 3 and then performing mathematical operations on 1 and 3 is not allowed.)

10 , 99  
21, 440

Ans ✓ 1. 30, 899

✗ 2. 15, 285

✗ 3. 26, 298

✗ 4. 3, 23

Q.8 A, B, P, Q, Y and Z are sitting around a circular table facing the centre (but not necessarily in the same order). Q sits to the immediate left of B. Y sits to the immediate right of B. A sits second to the right of B. P sits second to the right of A. Who sits third to the right of Z?

Ans ✗ 1. P

✗ 2. A

✗ 3. Q

✓ 4. B

**Q.9** Seven people A, B, C, D, E, F and G are sitting around a circular table, facing the center (but not necessarily in the same order). F is sitting fourth to the right of D. E is sitting second to the left of F. B is sitting to the immediate left of G. A is not an immediate neighbour of F.

How many people are sitting between C and D when counted from the right of D?

- Ans**
- 1. Three
  - 2. Four
  - 3. Two
  - 4. One

**Q.10** What should come in place of question mark (?) in the given series based on the English alphabetical order?  
XJP, VMN, TPL, RSJ, ?

- Ans**
- 1. PVH
  - 2. QVG
  - 3. PVG
  - 4. PUG

**Q.11** Read the given statements and conclusions carefully. Assuming that the information given in the statements is true, even if it appears to be at variance with commonly known facts, decide which of the given conclusions logically follow(s) from the statements.

**Statements:**

Some lights are fans.  
Some fans are beds.

**Conclusions:**

(I) Some lights are beds.  
(II) All beds are fans.

- Ans**
- 1. Both conclusion I and II follow
  - 2. Only conclusion I follows
  - 3. Neither conclusion I nor II follows
  - 4. Only conclusion II follows

Adda247

Q.12 Select the figure from among the given options that can replace the question mark (?) in the following series and complete the pattern.

8	3	V	8	=	V	8	=	
V	I	=	=	□	3	8	3	G G I V ?
G	□		I	G	□	I	3	□

Ans

✗ 1.

=		G
8	3	I
	□	V

✗ 2.

=		G
8	V	□
	I	3

✗ 3.

G		8
=	3	I
	□	V

✓ 4.

G		8
=	V	□
	I	3





Q.13 Select the figure from among the given options that can replace the question mark (?) in the following series.

C = X	= C	A C X	A	
	X X		C	?

Ans

1. X 3 A

2. C A X

3. C 3

4. C X

Q.14 EX04 is related to ZS16 in a certain way. In the same way, UN06 is related to PI36. To which of the following is WP07 related, following the same logic?

- Ans
- 1. RK94
  - 2. RK49
  - 3. KR94
  - 4. KR49

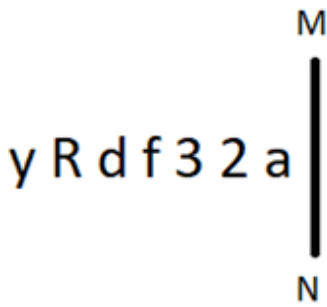
Q.15 In a certain code language, 'good bright boy' is coded as 'xd yf vj' and 'boy is lazy' is coded as 'sb xd ql'. How is 'boy' coded in the given language?

- Ans
- 1. ql
  - 2. yf
  - 3. xd
  - 4. vj

Q.16 14 is related to 93 following a certain logic. Following the same logic, 6 is related to 37. To which of the following is 11 related, following the same logic?  
(NOTE: Operations should be performed on the whole numbers, without breaking down the numbers into its constituent digits. E.g. 13 – Operations on 13 such as adding/subtracting/multiplying etc. to 13 can be performed. Breaking down 13 into 1 and 3 and then performing mathematical operations on 1 and 3 is not allowed.)

- Ans
- 1. 77
  - 2. 67
  - 3. 90
  - 4. 72

Q.17 Select the correct mirror image of the given figure when the mirror is placed at MN as shown below.



- Ans
- 1. a Ƨ ε † b R y
  - 2. a Ƨ ε † p R y
  - 3. a Ƨ ε † b R y
  - 4. a Ƨ ε † b R y

Q.18 What will come in the place of '?' in the following equation, if '+' and '-' are interchanged and 'x' and '÷' are interchanged?  
 $14 \div 7 - 27 \times 9 + 12 = ?$

- Ans
- 1. 71
  - 2. 89
  - 3. 81
  - 4. 79

Q.19 In a certain code language, 'like my pet' is written as 'nj kj lk' and 'pet is wet' is written as 'lk mk bt'. How is 'pet' written in the given language?

- Ans
- 1. nj
  - 2. mk
  - 3. kj
  - 4. lk

Q.20 GYEV is related to DBBY in a certain way based on the English alphabetical order. In the same way, XHVE is related to UKSH. To which of the following is LTJQ related, following the same logic?

- Ans
- 1. TYHU
  - 2. IGWT
  - 3. IGTR
  - 4. IWGT

Section : General Awareness

Q.1 Dappu dance is a famous dance form of which of the following states?

- Ans
- 1. Punjab
  - 2. Kerala
  - 3. Andhra Pradesh
  - 4. Bihar

Q.2 Purushottam Dadheech, a renowned Kathak dancer who had been honoured with Padma Shri award for 2020, is associated with which of the following places?

- Ans
- 1. Haryana
  - 2. Uttar Pradesh
  - 3. Bihar
  - 4. Madhya Pradesh

Q.3 अप्रैल 2023 में जारी अपनी 279वीं रिपोर्ट में भारत के विधि आयोग (Law Commission of India) ने किस कानून के प्रावधान को बरकरार रखने की अनुशंसा की है?

- Ans
- 1. राजद्रोह कानून (Sedition Law)
  - 2. राजस्व कानून (Revenue Law)
  - 3. श्रम कानून (Labour Law)
  - 4. सविदा कानून (Contract Law)

Q.4 What was the amount earned by BCCI from the sale of five teams in the inaugural Women's Indian Premier League (WPL) in January 2023?

- Ans
- 1. ₹4,669.99 crore
  - 2. ₹1,289.50 crore
  - 3. ₹7,245.89 crore
  - 4. ₹951.25 crore

Q.5 According to Article \_\_\_\_\_, there shall be equality of opportunities for all citizens in matters relating to employment or appointment to any office under the State.

- Ans
- 1. 17
  - 2. 16
  - 3. 18
  - 4. 19

Q.6 The architectural marvels, temples of Gangaikonda-Cholapuram, were built by which of the following king?

- Ans
- 1. King Rajendra
  - 2. King mahendravarman
  - 3. King Vijayalaya
  - 4. King Akabar

Q.7 किस घटना से अशोक की प्रशासनिक नीति में गहरा परिवर्तन आया?

- Ans
- 1. उनका सीलोन में मिशनरी भेजना
  - 2. उनका बौद्ध धर्म ग्रहण करना
  - 3. कलिंग युद्ध
  - 4. तृतीय बौद्ध संगीति

Q.8 Sahaswan gharana of Rampur was established by whom among the following personalities?

- Ans
- 1. Abdul Karim Khan
  - 2. Amanat Ali Khan
  - 3. Ustad Inayat Hussain Khan
  - 4. Ustad Ghaghe Khuda Baksh

Q.9 The Shore Temple at Mahabalipuram was built during the reign of the \_\_\_\_\_ king Narasimhavarman II.

- Ans
- 1. Chola
  - 2. Pallava
  - 3. Chalukya
  - 4. Chera

Q.10 The name of the autobiography of Saina Nehwal is called:

- Ans
- 1. Playing it my way
  - 2. Playing to win, my life on and off court
  - 3. Straight from the heart
  - 4. Unbreakable

Q.11 Which of the following is a mineral deficiency disease?

- Ans
- 1. Rickets
  - 2. Goitre
  - 3. Marasmus
  - 4. Scurvy

Q.12 In the PM-SVANidhi Scheme (2020), the urban street vendors are eligible to avail a Working Capital Loan up to 10,000 with a tenure of:

- Ans
- 1. 5 years
  - 2. 1 year
  - 3. 2 years
  - 4. 3 years

Q.13 Epilepsy is a disorder that affects which of the following parts of the human body?

- Ans
- 1. The muscles
  - 2. The teeth and bones
  - 3. Brain cells
  - 4. The skin

Q.14 What does WFI stand for in the context of sports?

- Ans
- 1. Women Federation of India
  - 2. Winter Games Federation of India
  - 3. Women Sports Federation of India
  - 4. Wrestling Federation of India

Q.15 As on February 2024, Yanthungo Patton is the Deputy Chief Minister of which of the following states?

- Ans
- 1. Meghalaya
  - 2. Sikkim
  - 3. Nagaland
  - 4. Assam

Q.16 Which of the following options has all vector quantities?

- Ans
- 1. Force, Velocity, Momentum, Energy and Acceleration
  - 2. Force, Velocity, Momentum, Weight and Acceleration
  - 3. Power, Momentum, Energy, Speed and Work
  - 4. Force, Velocity, Momentum, Energy and Power

Q.17 With reference to 'slash and burn' agriculture, which of the following names is NOT related to Odisha?

- Ans
- 1. Koman
  - 2. Pama Dabi
  - 3. Bringa
  - 4. Roca

Q.18 While estimating Gross Domestic Product, the monetary value of only final goods are considered because \_\_\_\_\_.

- a. its immobility, the active economic flow is ended.
- b. of the issues of double counting
- c. the value added at each stage of the production process is included

- Ans
- 1. Only a
  - 2. Only b
  - 3. All a, b and c
  - 4. Only b and c

**Q.19** National Rural Employment Guarantee Act was passed in which of the following years?

- Ans**
- 1. 2004
  - 2. 2009
  - 3. 2005
  - 4. 2006

**Q.20** Under which of the following Acts, was Warren Hastings appointed as the Governor-General of Bengal?

- Ans**
- 1. The Regulating Act, 1773
  - 2. The Government of India Act, 1858
  - 3. The Government of India Act, 1909
  - 4. The Government of India Act, 1935

**Q.21** Which of the following is NOT an example of a 'Lagoon'?

- Ans**
- 1. Chilika
  - 2. Pulicat
  - 3. Kolleru
  - 4. Nainital

**Q.22** Mica is which type of mineral?

- Ans**
- 1. Energy mineral
  - 2. Non-ferrous metallic
  - 3. Ferrous metallic
  - 4. Non-metallic

**Q.23** Which of the following social organisations was founded by Swami Dayananda Saraswati in 1875?

- Ans**
- 1. Brahma Samaj
  - 2. Satyashodhak Samaj
  - 3. Prarthana Samaj
  - 4. Arya Samaj

**Q.24** Sekrenyi festival of Nagaland is celebrated annually in the month of \_\_\_\_\_ as part of the Mini Hornbill Tribal Festival which is a celebration of purification accompanied with feasting and singing.

- Ans**
- 1. February
  - 2. August
  - 3. July
  - 4. March

**Q.25** The model of 'Quasi Federal' form of government in Indian constitution is borrowed from which country?

- Ans**
- 1. United Kingdom
  - 2. Germany
  - 3. Canada
  - 4. Australia

Section : English Language and Comprehension

**Q.1** Select the most appropriate synonym for the given word.  
**Fusion**

- Ans**
- 1. Glide
  - 2. Blend
  - 3. Grind
  - 4. Ingredient

**Q.2** Select the most appropriate meaning of the underlined idiom.  
The situation was out of hand. So, the manager called the police station for help.

- Ans**
- 1. To be uncontrollable
  - 2. To be abrupt
  - 3. In an undecided state
  - 4. To be serious

**Q.3** Select the most appropriate synonym of the underlined word in the given sentence.

His decision to quit his stable job and travel the world was driven by a sudden caprice.

- Ans**
- 1. Determination
  - 2. Impulse
  - 3. Sorrow
  - 4. Delight

**Q.4** Select the most appropriate option that can substitute the underlined segment in the given sentence.

One of the most horrified serials of the Indian television industry was broadcast twenty years ago.

- Ans**
- 1. more horrify serials
  - 2. most horrifying serials
  - 3. horrified serials
  - 4. most horror serials

**Q.5** Select the most appropriate ANTONYM of the highlighted word.

The new syllabus of Final Semester of MBA is very difficult.

- Ans**
- 1. problematical
  - 2. rigid
  - 3. easy
  - 4. perplexing

**Q.6** The following sentence has been split into four segments. Identify the segment that contains a grammatical error.  
It has been / noticed that / across all his faults, / he is admired.

- Ans**
- 1. It has been
  - 2. across all his faults
  - 3. he is admired
  - 4. noticed that

**Q.7** Select the INCORRECTLY spelt word.

- Ans**
- 1. Myriad
  - 2. Explanation
  - 3. Accolades
  - 4. Proposal

**Q.8** Select the most appropriate synonym of the given word.  
**Restraint**

- Ans**
- 1. Self-acceptance
  - 2. Self-appraisal
  - 3. Self-esteem
  - 4. Self-control

**Q.9** Select the option that has an error in the use of phrasal verb.

- Ans**
- 1. Pushpa came across an old photo in the album and asked me to recognise the face in it.
  - 2. Please suggest me some tips to get out nervousness.
  - 3. Please turn up the heater. The weather is too cold today .
  - 4. Back up your essential files. Technology is only sometimes reliable.

**Q.10** Select the INCORRECTLY spelt word.

- Ans**
- 1. Elegant
  - 2. Efficient
  - 3. Defecteev
  - 4. Crowded

**Q.11** Select the most appropriate form of comparative degree that can substitute the underlined segment in the given sentence.

Bilingual children are so intelligent than those who speak just one language.

- Ans**
- 1. so intelligent to
  - 2. better intelligent than
  - 3. more intelligent than
  - 4. the most intelligent to

**Q.12** The following sentence has been split into four segments. Identify the segment that contains a grammatical error.  
The gold watch / look really expensive / and is not affordable / for common people.

- Ans**
- 1. and is not affordable
  - 2. look really expensive
  - 3. for common people
  - 4. The gold watch

**Q.13** The given sentence is divided into four parts. One of them contains a grammatical error. Select the part that contains the error from the given options.

He was acquitted to / a cyber crime / on the basis of evidence / given to the court.

- Ans**
- 1. He was acquitted to
  - 2. given to the court
  - 3. on the basis of evidence
  - 4. a cyber crime

**Q.14** Rectify the following sentence by selecting the correct spelling of the underlined word from the options.

Life is a collection of ephmeral moments.

- Ans**
- 1. Epmeral
  - 2. Ephemerl
  - 3. Ephameral
  - 4. Ephemeral

**Q.15** Select the most appropriate option that can substitute the underlined words in the given sentence.

My mother asked me who did accompany me to the airport.

- Ans**
- 1. whom I was accompanied
  - 2. who accompany me
  - 3. who must accompanied me
  - 4. who accompanied me

**Q.16** Select the most appropriate idiom that can substitute the underlined segment in the given sentence.

This is going to be overwhelming for you as you have taken on work beyond your capabilities.

- Ans**
- 1. put something on ice
  - 2. at the eleventh hour
  - 3. bitten off more than you can chew
  - 4. called it a day

**Q.17** Select the most appropriate ANTONYM of the given word.  
Foremost

- Ans**
- 1. Disposed
  - 2. Premature
  - 3. Forecast
  - 4. Unimportant

**Q.18** Select the most appropriate meaning of the underlined phrase.

This sentence can have multiple meanings. Could you please specify what it means?

- Ans**
- 1. Ambiguous
  - 2. Homogeneous
  - 3. Amorphous
  - 4. Heterogeneous

**Q.19** The following sentence has been split into four segments. Identify the segment that contains a grammatical error.  
She is studying / the medicine / at university / to become a doctor.

- Ans**
- 1. the medicine
  - 2. at university
  - 3. to become a doctor.
  - 4. She is studying

**Q.20** In the following passage, some words have been deleted. Read the passage carefully and select the most appropriate option to fill in the blanks.

Leif Erikson is a Viking \_\_\_\_\_ believed to have sailed from the Green Lands to Vinland. Vinland is now thought to be the northern tip of Canada's Newfoundland island where \_\_\_\_\_ found evidence of Erikson's \_\_\_\_\_ in 1960s.

- Ans**
- 1. explorer; archaeologists; settlement
  - 2. astronomer; sculptors; colony
  - 3. calligrapher; historians; community
  - 4. sailor; excavators; packed

### Comprehension:

In the following passage, some words have been deleted. Read the passage carefully and select the most appropriate option to fill in each blank.

The newspaper is one of the significant signs of (1) \_\_\_\_\_ civilisation. It is the most popular form of reading in the (2) \_\_\_\_\_ times because it interests all sorts of people. It is full of political news, sports and commercial news, as well as articles by well-known writers. A newspaper keeps us (3) \_\_\_\_\_ entertained and informed.

In these days of democracy, public opinion rules everywhere. (4) \_\_\_\_\_ government can long withstand the pressure of a strong public opinion. It is, therefore, quite clear that the press controls public opinion, and public opinion, in turn, controls the government. Ultimately, the press controls the government. It acts as an interpreter between the government and the people and brings the rulers and the ruled (5) \_\_\_\_\_.

### SubQuestion No : 21

**Q.21** Select the most appropriate option to fill in blank number 1.

- Ans**
- 1. prehistoric
  - 2. ancient
  - 3. modern
  - 4. monolithic



**Comprehension:**

In the following passage, some words have been deleted. Read the passage carefully and select the most appropriate option to fill in each blank.

The newspaper is one of the significant signs of (1) \_\_\_\_\_ civilisation. It is the most popular form of reading in the (2) \_\_\_\_\_ times because it interests all sorts of people. It is full of political news, sports and commercial news, as well as articles by well-known writers. A newspaper keeps us (3) \_\_\_\_\_ entertained and informed.

In these days of democracy, public opinion rules everywhere. (4) \_\_\_\_\_ government can long withstand the pressure of a strong public opinion. It is, therefore, quite clear that the press controls public opinion, and public opinion, in turn, controls the government. Ultimately, the press controls the government. It acts as an interpreter between the government and the people and brings the rulers and the ruled (5) \_\_\_\_\_.

**SubQuestion No : 22****Q.22** Select the most appropriate option to fill in blank number 2.

- Ans**
- 1. past
  - 2. future
  - 3. present
  - 4. dark

**Comprehension:**

In the following passage, some words have been deleted. Read the passage carefully and select the most appropriate option to fill in each blank.

The newspaper is one of the significant signs of (1) \_\_\_\_\_ civilisation. It is the most popular form of reading in the (2) \_\_\_\_\_ times because it interests all sorts of people. It is full of political news, sports and commercial news, as well as articles by well-known writers. A newspaper keeps us (3) \_\_\_\_\_ entertained and informed.

In these days of democracy, public opinion rules everywhere. (4) \_\_\_\_\_ government can long withstand the pressure of a strong public opinion. It is, therefore, quite clear that the press controls public opinion, and public opinion, in turn, controls the government. Ultimately, the press controls the government. It acts as an interpreter between the government and the people and brings the rulers and the ruled (5) \_\_\_\_\_.

**SubQuestion No : 23****Q.23** Select the most appropriate option to fill in blank number 3.

- Ans**
- 1. both
  - 2. either
  - 3. or
  - 4. nor

**Comprehension:**

In the following passage, some words have been deleted. Read the passage carefully and select the most appropriate option to fill in each blank.

The newspaper is one of the significant signs of (1) \_\_\_\_\_ civilisation. It is the most popular form of reading in the (2) \_\_\_\_\_ times because it interests all sorts of people. It is full of political news, sports and commercial news, as well as articles by well-known writers. A newspaper keeps us (3) \_\_\_\_\_ entertained and informed.

In these days of democracy, public opinion rules everywhere. (4) \_\_\_\_\_ government can long withstand the pressure of a strong public opinion. It is, therefore, quite clear that the press controls public opinion, and public opinion, in turn, controls the government. Ultimately, the press controls the government. It acts as an interpreter between the government and the people and brings the rulers and the ruled (5) \_\_\_\_\_.

**SubQuestion No : 24****Q.24** Select the most appropriate option to fill in blank number 4.

- Ans**
- 1. Some
  - 2. Both
  - 3. All
  - 4. No

**Comprehension:**

In the following passage, some words have been deleted. Read the passage carefully and select the most appropriate option to fill in each blank.

The newspaper is one of the significant signs of (1) \_\_\_\_\_ civilisation. It is the most popular form of reading in the (2) \_\_\_\_\_ times because it interests all sorts of people. It is full of political news, sports and commercial news, as well as articles by well-known writers. A newspaper keeps us (3) \_\_\_\_\_ entertained and informed.

In these days of democracy, public opinion rules everywhere. (4) \_\_\_\_\_ government can long withstand the pressure of a strong public opinion. It is, therefore, quite clear that the press controls public opinion, and public opinion, in turn, controls the government. Ultimately, the press controls the government. It acts as an interpreter between the government and the people and brings the rulers and the ruled (5) \_\_\_\_\_.

**SubQuestion No : 25**

**Q.25** Select the most appropriate option to fill in blank number 5.

- Ans**
- 1. apart
  - 2. jointed
  - 3. overall
  - 4. together

