

Multi Tasking Non Technical Staff and Havaldar CBIC and CBN Examination 2024

Exam Date	07/10/2024
Exam Time	9:00 AM - 11:00 AM
Subject	MTS Non Tech Havaldar CBIC and CBN Examination 2024

Section : Numerical and Mathematical Ability

Q.1 What is the area of the remaining portion of a circle of radius 14 cm when a square with maximum possible area inscribed in it is removed from it? (Use $\pi = 22/7$)

- Ans
- 1. 520 cm²
 - 2. 224 cm²
 - 3. 616 cm²
 - 4. 518 cm²

Q.2 A sum of ₹2,380 is lent out into two parts, one at 25% p.a. and another at 20% p.a. . If the total annual income is ₹500, find the money (in ₹) lent at 25% rate.

- Ans
- 1. 320
 - 2. 560
 - 3. 240
 - 4. 480

Q.3 The speed of a boat in still water is 15 km/h and the speed of the current is 3 km/h. How much distance (in km) can be covered going downstream in 12 minutes?

- Ans
- 1. 3.5
 - 2. 3.6
 - 3. 3.4
 - 4. 3.7

Q.4 A hemispherical bowl is 264 cm round at the brim. Suppose that the bowl is half-full of beverage. If the beverage is served in hemispherical glasses 6 cm in the diameter at the top, how many people would be served?

- Ans
- 1. 1372
 - 2. 1470
 - 3. 1270
 - 4. 1170

Q.5 Two vessels, A and B, contain spirit and water in the ratio 3 : 4 and 5 : 3, respectively. Find the ratio in which these two mixtures be mixed to obtain a new mixture in vessel C containing spirit and water in the ratio 4 : 3.

- Ans
- 1. 5 : 8
 - 2. 3 : 7
 - 3. 3 : 8
 - 4. 4 : 7

Q.6 Find the simple interest (in ₹) on ₹3000 as a sum borrowed at 6% per year rate of interest for 4 years.

- Ans
- 1. 760
 - 2. 680
 - 3. 720
 - 4. 660

Q.7 If the cash difference between the selling price of an item at a gain of 3% and 6% is ₹9, which of the following options is the correct ratio between the selling prices?

- Ans
- 1. 103 : 100
 - 2. 103 : 106
 - 3. 101 : 103
 - 4. 101 : 105

Q.8 The marked price of a folding bed is ₹18,000. Aman bought it after two successive discount of 15% and 10%. He spent ₹830 on transportation and sold it for ₹18,440. Find his profit.

- Ans
- 1. ₹3,148
 - 2. ₹3,840
 - 3. ₹2,869
 - 4. ₹3,539

Q.9 The highest common factor of 84 and 108 is:

- Ans
- 1. 6
 - 2. 12
 - 3. 8
 - 4. 16

Q.10 In a student council election, there were three contestants. All the voters participated in the voting and 10% of votes were declared invalid. The contestants got the votes in the ratio 8 : 7 : 5. If the second candidate in the list got 4725 votes, the total number of valid votes is:

- Ans
- 1. 9,000
 - 2. 13,500
 - 3. 11,500
 - 4. 10,000

Q.11 Raju sold 4 laptops at a rate of ₹1,54,005 all together and incurred a loss of 25%. At what rate should he sell the laptops to gain a profit of 25%?

- Ans
- 1. ₹2,31,007.5
 - 2. ₹2,05,340
 - 3. ₹2,56,675
 - 4. ₹2,25,820

Q.12 If the volume and surface area of a sphere are numerically the same, then find the volume (in cm^3) of its semi - sphere. (correct to two places of decimals, use $\pi = 3.14$)

- Ans
- 1. 65.25
 - 2. 56.25
 - 3. 65.52
 - 4. 56.52

Q.13 Find the simple interest (in ₹) on ₹2500 as a sum borrowed at 9% per year rate of interest for 6 years.

Ans 1. 1310

2. 1350

3. 1290

4. 1390

Q.14 Surendra bought an old bicycle for ₹2,500 and spent ₹300 on its repair. He sold it for ₹3,000. Find his profit percentage.

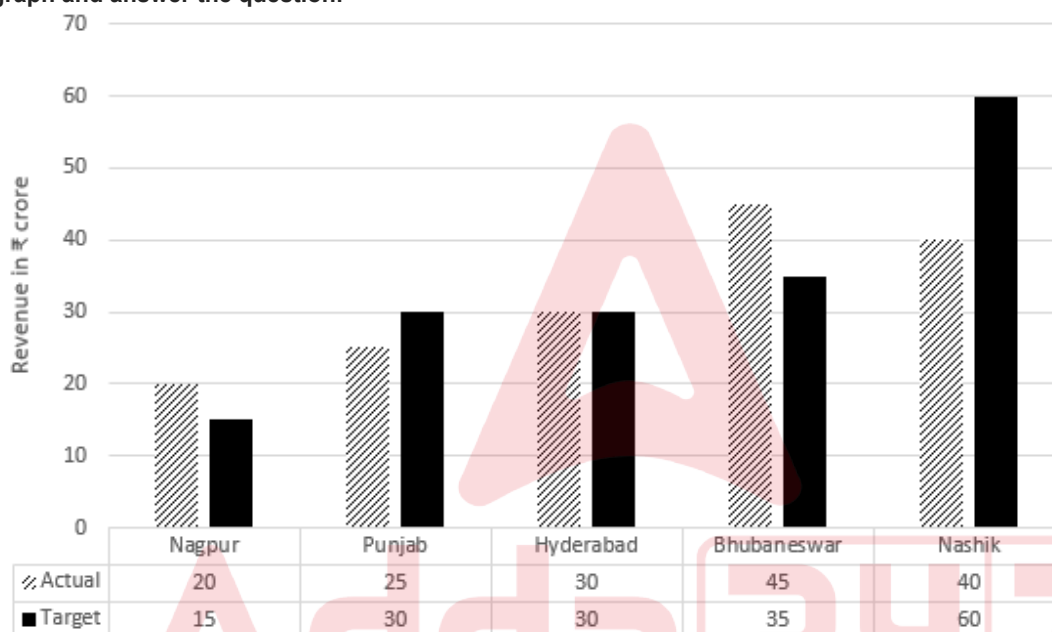
Ans 1. $7\frac{1}{7}\%$

2. $11\frac{2}{3}\%$

3. $7\frac{5}{9}\%$

4. $13\frac{4}{11}\%$

Q.15 The following graph shows the actual and target revenue (in crores) of an industry in five different branches. Study the graph and answer the question:



The ratio of total actual revenue to the total target revenue over all the branches is:

Ans 1. 17 : 16

2. 16 : 17

3. 14 : 13

4. 13 : 14

Q.16 A person travels equal distances with speeds of 3 km/hr, 4 km/hr and 8 km/hr, respectively, and takes a total of 425 minutes. What is the total distance (in km) travelled?

Ans 1. 27

2. 32

3. 28

4. 30

Q.17 The average age of a group of 32 women is 60 years and that of another group of 40 men is 33 years. The average age of the two groups mixed together is:

Ans 1. 46.5 years

2. 45 years

3. 42 years

4. 48 years

Q.18 A vendor wants to gain 25% by adding water to milk and selling the mixture at the cost price. Find the ratio of water and milk in the mixture.

- Ans
- 1. 2 : 7
 - 2. 2 : 5
 - 3. 1 : 5
 - 4. 1 : 4

Q.19 The following table shows the number of mobile phones (in thousands) manufactured by three companies A, B and C from the year 2007 to 2011.

Year/Company Name	A	B	C
2007	450	650	540
2008	310	820	950
2009	1090	1080	1150
2010	1675	1700	1500
2011	2532	2120	2420

Which company manufactured the maximum number of mobile phones as compared to all other companies, and in which year?

- Ans
- 1. Company A, in 2011
 - 2. Company C, in 2011
 - 3. Company A, in 2010
 - 4. Company B, in 2009

Q.20 The average age of 12 men is increased by 6 years when three of them, whose ages are 36, 40 and 44 years, are replaced by 3 persons. What is the average age of the 3 persons?

- Ans
- 1. 50 years
 - 2. 64 years
 - 3. 58 years
 - 4. 67 years

Section : Reasoning Ability and Problem Solving

Q.1 Read the given statement(s) and conclusions carefully. Assuming that the information given in the statements is true, even if it appears to be at variance with commonly known facts, decide which of the given conclusions logically follow(s) from the statement(s).

Statements:

Some kites are rocks.
All rocks are stones.

Conclusions:

(I) Atleast some kites are stones.
(II) All stones are rocks.

- Ans
- 1. Only conclusion (I) follows.
 - 2. Only conclusion (II) follows.
 - 3. Both conclusions (I) and (II) follow.
 - 4. Neither conclusion (I) nor (II) follows.

Q.2 What should come in place of the question mark (?) in the given series based on the English alphabetical order?

GGB, HHD ,IKH, JPN, ?

- Ans
- 1. KVV
 - 2. PUV
 - 3. OWV
 - 4. OUV

Q.3 In the following number-pairs, the second number is obtained by applying certain mathematical operations to the first number. Select the set in which the numbers are related in the same way as are the numbers of the following sets.

(NOTE: Operations should be performed on the whole numbers, without breaking down the numbers into their constituent digits. E.g. 13 – Operations on 13 such as adding/subtracting/multiplying to 13 can be performed. Breaking down 13 into 1 and 3 and then performing mathematical operations on 1 and 3 is not allowed.)

24, 73
27, 82

- Ans
- 1. 32, 101
 - 2. 33, 101
 - 3. 33, 100
 - 4. 32, 100

Q.4 519 is related to 781 following a certain logic. Following the same logic, 642 is related to 904. To which of the following is 485 related, following the same logic?

(NOTE: Operations should be performed on the whole numbers, without breaking down the numbers into its constituent digits. E.g. 13 – Operations on 13 such as adding /subtracting / multiplying etc., to 13 can be performed. Breaking down 13 into 1 and 3 and then performing mathematical operations on 1 and 3 is not allowed.)

- Ans
- 1. 747
 - 2. 721
 - 3. 794
 - 4. 756

Q.5 What should come in place of the question mark (?) in the following series?

1, 17, 33, 49, 65, ?

- Ans
- 1. 77
 - 2. 80
 - 3. 81
 - 4. 79

Q.6 In a certain code language, 'father makes tea' is coded as 'ib fx ey' and 'tea and coffee' is coded as 'kr ey wn'. How is 'tea' coded in the given language?

- Ans
- 1. fx
 - 2. ey
 - 3. kr
 - 4. wn

Q.7 In a certain code language, 'FLOAT' is coded as '14238' and 'BLOAT' is coded as '23849'. What is the code for 'F' in the given code language?

- Ans
- 1. 2
 - 2. 9
 - 3. 1
 - 4. 4

Q.8 M, N, O, P, Q and R are sitting around a circular table facing the centre (but not necessarily in the same order). N sits to the immediate right of R. M sits second to the right of N. P sits second to the right of M. O sits third to the right of P. Who sits to the immediate right of Q?

- Ans**
- 1. O
 - 2. P
 - 3. R
 - 4. M

Q.9 Seven friends, Kamala, Raveena, Amruta, Nisha, Gautami, Bhavana and Triveni, are sitting in a circular dining table facing the centre (but not necessarily in the same order). Raveena is sitting second to the right of Nisha. Gautami has Kamala and Triveni as immediate neighbours. Triveni is sitting third to the left of Nisha. Amruta is not an immediate neighbour of Nisha. Who is seated fourth to the left of Bhavana?

- Ans**
- 1. Triveni
 - 2. Nisha
 - 3. Kamala
 - 4. Raveena

Q.10 PLRN is related to QMSO in a certain way based on the English alphabetical order. In the same way, LHNJ is related to MIOK. To which of the following is HDJF related, following the same logic?

- Ans**
- 1. IEGK
 - 2. EIKG
 - 3. EIGK
 - 4. IEKG

Q.11 Read the given statements and conclusions carefully. Assuming that the information given in the statements is true, even if it appears to be at variance with commonly known facts, decide which of the given conclusions logically follow(s) from the statements.

Statements:

All planets are rocks.
All rocks are lakes.

Conclusions:

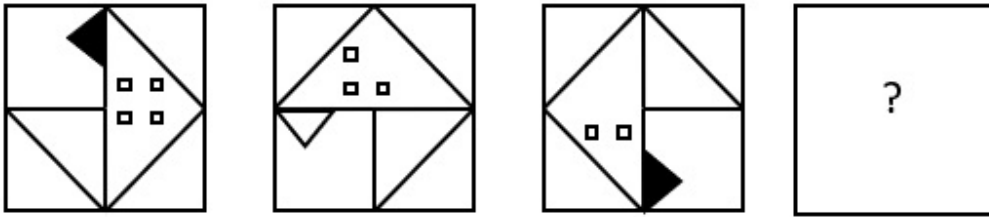
(I) All planets are lakes.
(II) All rocks are planets.

- Ans**
- 1. Both conclusions I and II follow.
 - 2. Only conclusion II follows.
 - 3. Neither conclusion I nor II follows.
 - 4. Only conclusion I follows.

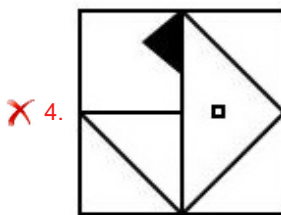
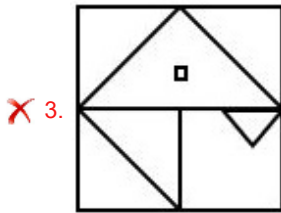
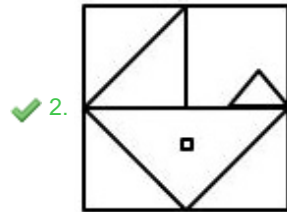
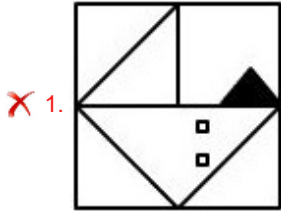
Q.12 FI29 is related to TW49 in a certain way. In the same way, LO38 is related to ZC58. To which of the following is RU65 related, following the same logic?

- Ans**
- 1. FI85
 - 2. FE85
 - 3. EF58
 - 4. IF58

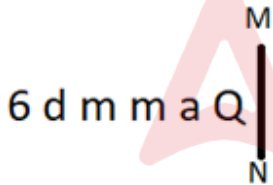
Q.13 Identify the figure given in the options that when put in place of the question mark (?) will logically complete the series.



Ans



Q.14 Select the correct mirror image of the given figure when the mirror is placed at MN as shown below.



Ans

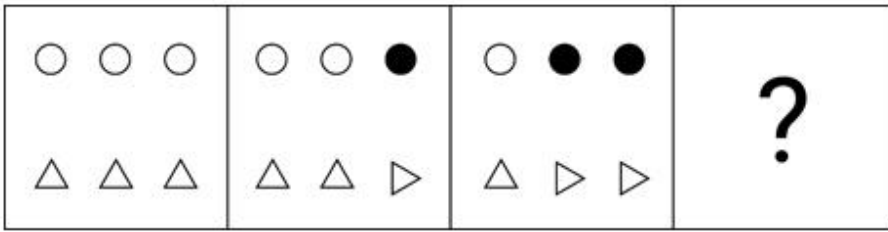
✗ 1. ɔ e w w e q

✓ 2. Q ɛ m m b ɔ

✗ 3. Q ɛ m m 6 d

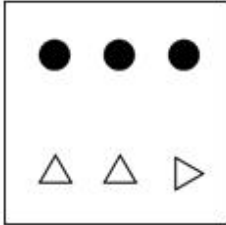
✗ 4. Q ɛ w w b ɔ

Q.15 Identify the figure given in the options which when put in place of (?) will logically complete the series.

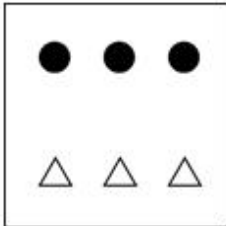


Ans


✗ 1.



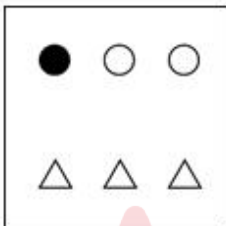
✗ 2.



✓ 3.



✗ 4.



Q.16 In a certain code language, 'MOVE' is coded as '3917' and 'EAST' is coded as '4692'. What is the code for 'E' in the given code language?

Ans ✓ 1. 9

✗ 2. 2

✗ 3. 7

✗ 4. 4

Q.17 What will come in the place of '?' in the following equation, if '+' and '-' are interchanged and 'x' and '÷' are interchanged?
 $8 + 2 - 1 \times 1 \div 1 = ?$

Ans ✓ 1. 7

✗ 2. 10

✗ 3. 5

✗ 4. 3

Q.18 In a certain code language, 'GIFT' is coded as '5197' and 'FIST' is coded as '4157'. What is the code for 'S' in that language?

Ans ✗ 1. 1

✓ 2. 4

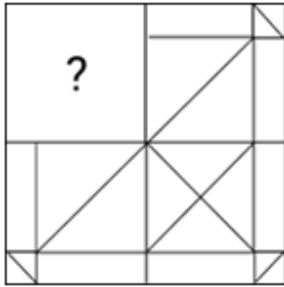
✗ 3. 5

✗ 4. 9

Q.19 What will come in the place of the question mark (?) in the following equation, if '+' and 'x' are interchanged and '÷' and '-' are interchanged?
 $15 \div 5 + 8 - 4 \times 7 = ?$

- Ans
- 1. 25
 - 2. 22
 - 3. 12
 - 4. 18

Q.20 Select the option figure that will replace the question mark (?) in the figure given below to complete the pattern.



Ans

- 1.
- 2.
- 3.
- 4.

Section : General Awareness

Q.1 The sister of Harshavardhana Rajyashri was married to _____, the king of Maukhari dynasty of Kanyakubja.

- Ans
- 1. Sasanka
 - 2. Devagupta
 - 3. Grahavarman
 - 4. Isanavarman

Q.2 Which of the following states had benefitted by the Indira Gandhi Canal?

- Ans
- 1. Uttar Pradesh
 - 2. Madhya Pradesh
 - 3. Gujarat
 - 4. Rajasthan

Q.3 Helium gas can be converted to the liquid form by the _____.

- Ans**
- 1. hydrogen bonding interaction
 - 2. London forces of attraction
 - 3. dipole-dipole forces of attraction
 - 4. dipole-induced dipole forces of attraction

Q.4 Who among the following is the ex-officio Chairperson of the Rajya Sabha as on 10 October 2023?

- Ans**
- 1. Prakash Javdekar
 - 2. Virendra Kumar
 - 3. Piyush Goyal
 - 4. Jagdeep Dhankar

Q.5 In which of the following systems was the charge of collecting the revenue and paying it to the Company given to the village headman, rather than the zamindar?

- Ans**
- 1. Mahalwari
 - 2. Ryotwari
 - 3. Iqtadari
 - 4. Zamindari

Q.6 Which team won the Women's Asian Hockey Champions Trophy in 2023?

- Ans**
- 1. Japan
 - 2. India
 - 3. Malaysia
 - 4. South Korea

Q.7 Pandit Arvind Thatte belongs to which of the following gharanas?

- Ans**
- 1. Agra gharana
 - 2. Mewati gharana
 - 3. Indore gharana
 - 4. Benaras gharana

Q.8 S Abdul Nazeer was appointed as the Governor of _____ in February 2023.

- Ans**
- 1. Maharashtra
 - 2. Goa
 - 3. Andhra Pradesh
 - 4. Kerala

Q.9 Who among the following signed a pact with Lord Irwin on March 5, 1931?

- Ans**
- 1. Jawaharlal Nehru
 - 2. Mahatma Gandhi
 - 3. B R Ambedkar
 - 4. Subhas Chandra Bose

Q.10 The digestive enzymes inside lysosomes are made by:

- Ans**
- 1. Golgi apparatus
 - 2. mitochondria
 - 3. plastids themselves
 - 4. rough endoplasmic reticulum

Q.11 Who was the Registrar General and Census Commissioner of India for the 2011 Indian Census?

- Ans**
- 1. Jayant Kumar Banthia
 - 2. Devender Kumar Sikri
 - 3. Dr. C Chandramouli
 - 4. Vivek Joshi

Q.12 Sarhul is an agricultural festival of tribals, which is primarily celebrated in the Indian state of _____.

- Ans**
- 1. Sikkim
 - 2. Uttarakhand
 - 3. Jharkhand
 - 4. Gujarat

Q.13 Who was the famous Venetian traveller of the 13th century who visited Kerala?

- Ans**
- 1. Marco Polo
 - 2. Abdur Razzaq
 - 3. Nicolo Conti
 - 4. Bartheta

Q.14 What is the primary gas responsible for the leavening effect in bread when yeast ferments sugars?

- Ans**
- 1. Carbon dioxide
 - 2. Helium
 - 3. Nitrogen
 - 4. Oxygen

Q.15 What is Cash Reserve Ratio?

- Ans**
- 1. Percentage of deposits that a bank must keep as cash reserves with any bank
 - 2. Percentage of deposits that a central bank must keep as cash reserves with the bank
 - 3. Percentage of deposits that a central bank must keep as cash reserves with the government
 - 4. Percentage of deposits that a bank must keep as cash reserves with the central bank

Q.16 Which of the following is the style of temple architecture that is widely favoured in northern India?

- Ans**
- 1. Madapa
 - 2. David
 - 3. Vihar
 - 4. Nagar

Q.17 In the inaugural year of the Nehru Cup event for football in 1982, which team emerged as the winner of the first edition?

- Ans**
- 1. Poland
 - 2. Ghana
 - 3. Australia
 - 4. Uruguay

Q.18 According to Census 2011, what is the sex ratio of India?

- Ans**
- 1. 950
 - 2. 933
 - 3. 998
 - 4. 943

Q.19 Which of the following mountain peaks is a part of the Himalayas?

- Ans
- 1. Taramati
 - 2. Dhupgarh
 - 3. Kalsubai
 - 4. Kamet

Q.20 'My Country My Life' is the autobiography of:

- Ans
- 1. Lal Krishna Advani
 - 2. Manmohan Singh
 - 3. Natwar Singh
 - 4. Khushwant Singh

Q.21 Kalamandalam Krishnan Nair was a notable figure in which of the following classical dance forms of India?

- Ans
- 1. Kuchipudi
 - 2. Mohiniyattam
 - 3. Kathakali
 - 4. Bharatnatyam

Q.22 Which Tamil superstar founded the Tamilaga Vettri Kazhagam (TVK) political party in Tamil Nadu and Puducherry on 2 February 2024 with the slogan 'Pirappokkum Ellaa Uyirkkum' (All are equal by birth)?

- Ans
- 1. Rajinikanth
 - 2. Kamal Haasan
 - 3. Dhanush
 - 4. Vijay

Q.23 A river is capable of forming which of the following landscapes when the river is in its middle course?

- Ans
- 1. A meander
 - 2. V shaped valley
 - 3. Waterfalls
 - 4. A delta

Q.24 Which of the following is NOT related to goals of Fundamental Duties of Indian Citizens?

- Ans
- 1. Courage
 - 2. Preserve
 - 3. Cherish
 - 4. Respect

Q.25 _____ was well known for creating fusion art by adapting European theatrical techniques to Indian classical dance combined with Indian folk and tribal dance.

- Ans
- 1. Birju Maharaj
 - 2. Guru Bipin Singh
 - 3. Kelucharan Mohapatra
 - 4. Uday Shankar

Q.1 Select the most appropriate option to fill in the blank
School classrooms have _____ very little over the last century.

- Ans**
- 1. freed
 - 2. changed
 - 3. startled
 - 4. unconcerned

Q.2 Select the most appropriate ANTONYM of the given word.

Entice

- Ans**
- 1. Allure
 - 2. Repulse
 - 3. Tangle
 - 4. Invite

Q.3 Select the most appropriate ANTONYM to substitute the underlined word in the given sentence.

In what ways do you find technological advancements beneficial to your daily life?

- Ans**
- 1. unfavourable
 - 2. unapproachable
 - 3. unfathomable
 - 4. unwarranted

Q.4 In the following sentence the underlined part contains an error. Alternatives to the underlined part are given as options.
Select the correct alternative.
The new almira is big than this one.

- Ans**
- 1. biggest
 - 2. more bigger
 - 3. bigger
 - 4. more big

Q.5 Select the most appropriate ANTONYM of the given word.

Conscious

- Ans**
- 1. Unaware
 - 2. Sensible
 - 3. Sentimental
 - 4. Secure

Q.6 Select the correctly spelt word to fill in the blank.
We are entering a point where technology will change at _____ speeds.

- Ans**
- 1. modarate
 - 2. extreme
 - 3. inferier
 - 4. supprime

Q.7 The following sentence has been split into four segments. Identify the segment that contains a grammatical error.
He is waiting / at airport to receive / Mr. Smith, who is / coming from South Africa.

- Ans**
- 1. at airport to receive
 - 2. Mr. Smith, who is
 - 3. He is waiting
 - 4. coming from South Africa.

Q.8 The following sentence has been split into four segments. Identify the segment that contains a grammatical error.
He cheated in the [A] / examination, making his [B] / already-falling academic [C] / credentials worst. [D]

- Ans**
- 1. C
 - 2. B
 - 3. D
 - 4. A

Q.9 Select the option that rectifies the spelling of the underlined word in the given sentence.
The concert was canceled due to rain.

- Ans**
- 1. Cancaeled
 - 2. Cancelled
 - 3. Cancealed
 - 4. Cencelled

Q.10 Identify the ODD word from the given options.

- Ans**
- 1. Billiards
 - 2. Carom
 - 3. Golf
 - 4. Table tennis

Q.11 Select the INCORRECTLY spelt word.

- Ans**
- 1. Spouse
 - 2. Intransigence
 - 3. Unambiguous
 - 4. Endangered

Q.12 The following sentence has been split into four segments. Identify the segment that contains an error in phrasal verb.

Tina dropped behind of / college and / went straight / into a good job.

- Ans**
- 1. college and
 - 2. into a good job
 - 3. Tina dropped behind of
 - 4. went straight

Q.13 Select the most appropriate meaning of the given idiom.

Run errands

- Ans**
- 1. To participate in a race through unfair means
 - 2. To finish running before the end point
 - 3. To do something incorrectly or erroneous in haste
 - 4. To go out to buy or do something

Q.14 Select the most appropriate option to fill in the blanks.

Our _____ conducted a _____ to get everyone's opinion.

- Ans**
- 1. principle; pole
 - 2. principal; pole
 - 3. principal; poll
 - 4. principle; poll

Q.15 Select the option that will improve the underlined part of the given sentence.

Arun asks Smita to copy the contents of the document word by word.

- Ans**
- 1. word par word
 - 2. word with word
 - 3. word for word
 - 4. word to word

Q.16 Select the most appropriate degree of comparison to fill in the blank.

Many ornithologists believe that the northern mocking birds are _____ wild birds in the jungle.

- Ans**
- 1. the noisy
 - 2. noisier
 - 3. the noisiest
 - 4. noisy

Q.17 Select the most appropriate synonym of the word given in brackets to fill in the blank.

The rivals in the institution _____ (fabricated) evidence and manipulated the whole dataset.

- Ans**
- 1. forged
 - 2. fluctuated
 - 3. destroyed
 - 4. wrecked

Q.18 Select the most appropriate meaning of the underlined idiom.

He gnashed his teeth at his son's actions.

- Ans**
- 1. expressed sadness
 - 2. expressed disappointment
 - 3. expressed joy
 - 4. expressed rage

Q.19 The following sentence has been divided into parts. One of them may contain an error. Select the part that contains the error from the given options. If you don't find any error, mark 'No error' as your answer.

My friend, / Priya looks more cheerful today / as she celebrates her birthday.

- Ans**
- 1. No error
 - 2. My friend,
 - 3. Priya looks more cheerful today
 - 4. as she celebrates her birthday

Q.20 Select the most appropriate option to fill in the blank.

Leisure activities can improve an individual's physical and mental health by _____ stress, and offering a pleasurable experience.

- Ans**
- 1. relieving
 - 2. reconstructing
 - 3. upsetting
 - 4. irritating

Comprehension:

In the following passage, some words have been deleted. Read the passage carefully and select the most appropriate option to fill in each blank.

Dolphins 1 _____ regarded as the friendliest creatures in the sea, and stories of them helping drowning sailors have been common since Roman times. The more we 2 _____ about dolphins, the more we realise that their society is more complex 3 _____ people previously imagined. They look 4 _____ other dolphins when they are ill, care for pregnant 5 _____ and protect the weakest in the community, as we do.

SubQuestion No : 21

Q.21 Select the most appropriate option to fill in blank number 1.

- Ans**
- 1. is
 - 2. are
 - 3. was
 - 4. has

Comprehension:

In the following passage, some words have been deleted. Read the passage carefully and select the most appropriate option to fill in each blank.

Dolphins 1 _____ regarded as the friendliest creatures in the sea, and stories of them helping drowning sailors have been common since Roman times. The more we 2 _____ about dolphins, the more we realise that their society is more complex 3 _____ people previously imagined. They look 4 _____ other dolphins when they are ill, care for pregnant 5 _____ and protect the weakest in the community, as we do.

SubQuestion No : 22

Q.22 Select the most appropriate option to fill in blank number 2.

- Ans**
- 1. learns
 - 2. learned
 - 3. learning
 - 4. learn

Comprehension:

In the following passage, some words have been deleted. Read the passage carefully and select the most appropriate option to fill in each blank.

Dolphins 1 _____ regarded as the friendliest creatures in the sea, and stories of them helping drowning sailors have been common since Roman times. The more we 2 _____ about dolphins, the more we realise that their society is more complex 3 _____ people previously imagined. They look 4 _____ other dolphins when they are ill, care for pregnant 5 _____ and protect the weakest in the community, as we do.

SubQuestion No : 23

Q.23 Select the most appropriate option to fill in blank number 3.

- Ans**
- 1. for
 - 2. than
 - 3. to
 - 4. the

Comprehension:

In the following passage, some words have been deleted. Read the passage carefully and select the most appropriate option to fill in each blank.

Dolphins 1 _____ regarded as the friendliest creatures in the sea, and stories of them helping drowning sailors have been common since Roman times. The more we 2 _____ about dolphins, the more we realise that their society is more complex 3 _____ people previously imagined. They look 4 _____ other dolphins when they are ill, care for pregnant 5 _____ and protect the weakest in the community, as we do.

SubQuestion No : 24

Q.24 Select the most appropriate option to fill in blank number 4.

- Ans**
- 1. into
 - 2. after
 - 3. on
 - 4. up

Comprehension:

In the following passage, some words have been deleted. Read the passage carefully and select the most appropriate option to fill in each blank.

Dolphins 1 _____ regarded as the friendliest creatures in the sea, and stories of them helping drowning sailors have been common since Roman times. The more we 2 _____ about dolphins, the more we realise that their society is more complex 3 _____ people previously imagined. They look 4 _____ other dolphins when they are ill, care for pregnant 5 _____ and protect the weakest in the community, as we do.

SubQuestion No : 25

Q.25 Select the most appropriate option to fill in blank number 5.

- Ans**
- 1. mothers
 - 2. fathers
 - 3. brothers
 - 4. uncles

